

NOM:

DATA:

Fitxa
5


Restes amb nombres fins al 9

Nom _____ Data _____


1. Completa.



$$5 - 3 = 2$$



$$\square - \square = \square$$




$$\square - \square = \square$$



$$\square - \square = \square$$




$$\square - \square = \square$$



$$\square - \square = \square$$



$$\square - \square = \square$$



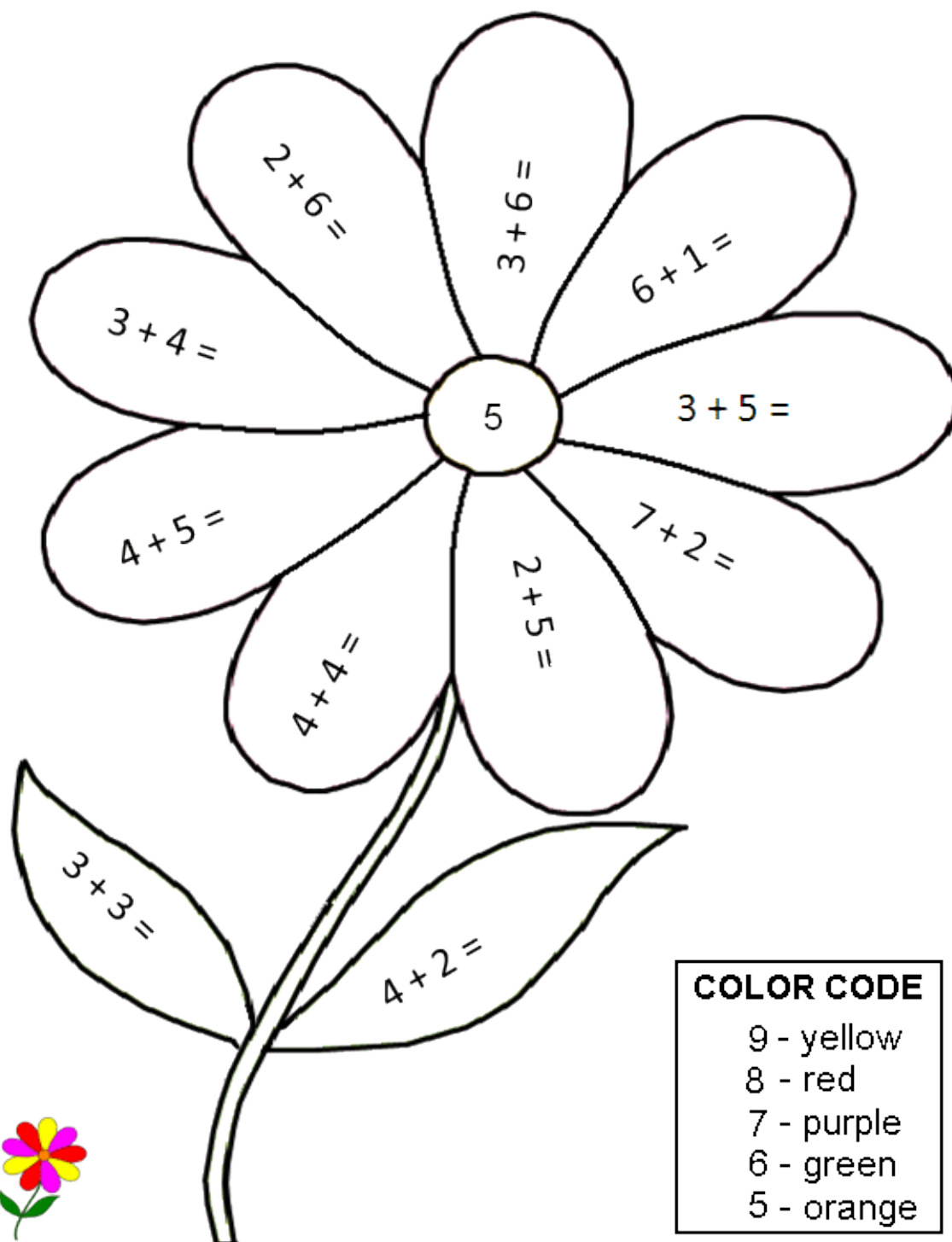
$$\square - \square = \square$$

© 2007 Grup Promotor/Santillana Educativa, S.

NOM:

DATA:


FES LES SUMES I PINTA DEL COLOR INDICAT. ATENCIÓ, ELS COLORS SÓN EN ANGLÈS!



Nom:

Data:

Suma amb ajuda dels dibuixos:



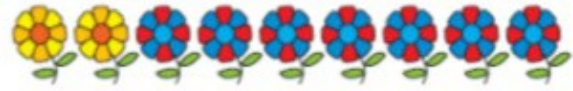
$5 + 3 = \underline{\quad}$



$2 + 6 = \underline{\quad}$




$3 + 4 = \underline{\quad}$



$2 + 7 = \underline{\quad}$



$2 + 3 = \underline{\quad}$



$1 + 8 = \underline{\quad}$



$1 + 5 = \underline{\quad}$



$3 + 5 = \underline{\quad}$



$6 + 1 = \underline{\quad}$





$1 + 1 = \underline{\quad}$

NOM:

DATA:


FES LES RESTES I MARCA LES FRUITES I VERDURES QUE T'HAS MENJAT:


$$\begin{array}{r} 4 \\ - 3 \\ \hline \square \end{array}$$


$$\begin{array}{r} 3 \\ + 1 \\ \hline \square \end{array}$$


$$\begin{array}{r} 5 \\ - 4 \\ \hline \square \end{array}$$


$$\begin{array}{r} 2 \\ + 1 \\ \hline \square \end{array}$$


$$\begin{array}{r} 5 \\ - 3 \\ \hline \square \end{array}$$


$$\begin{array}{r} 3 \\ - 1 \\ \hline \square \end{array}$$


$$\begin{array}{r} 4 \\ - 2 \\ \hline \square \end{array}$$


$$\begin{array}{r} 5 \\ - 3 \\ \hline \square \end{array}$$